

ST PATRICKS



10 FRAMES



Name: _____

10 FRAMES

Write down the number of horseshoes in each set.

U	U			
U	U	U		

U	U	U	U	U
U	U	U	U	

U				
U				

U				
U	U	U	U	U

U	U	U		
U				

		U		

		U		
U				U

U	U	U	U	
U	U	U		

U	U	U	U	U
U	U	U	U	U

U		U		U
U	U	U	U	U

Name: _____



10 FRAMES

Draw the number of horseshoes in each set.

5

1

3

8

10

6

2

9

7

4

Name: _____



10 FRAMES

Blank 10 frame
template sheet

--

--

--

--

--

--

--

--

--

--

Name: _____



10 FRAMES

Complete the 10 frame and fill in the missing numbers.

U	U			
U	U	U		

___ + ___ = 10

U	U	U	U	U
				U

___ + ___ = 10

☘				☘
	☘			

___ + ___ = 10

☘		☘		☘
☘		☘		☘

___ + ___ = 10

U				
U	U			

___ + ___ = 10

U				

___ + ___ = 10

☘				☘
☘				☘

___ + ___ = 10

☘	☘	☘		
☘	☘	☘	☘	☘

___ + ___ = 10

Name: _____



10 FRAMES

Complete the 10 frame and fill in the missing numbers.

___ + ___ = ___

___ + ___ = ___

___ + ___ = ___

___ + ___ = ___

___ + ___ = ___

___ + ___ = ___

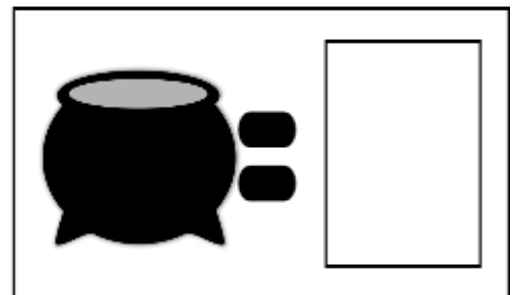

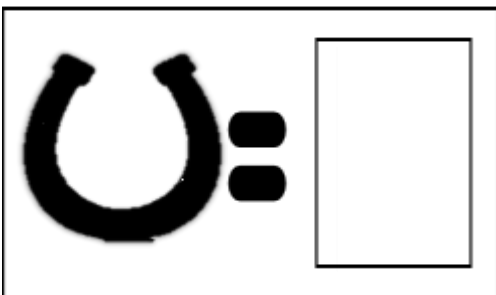
___ + ___ = ___

___ + ___ = ___


Drawing Activity




horseshoes, shamrocks, and pots





Color or circle the number of horseshoes, shamrocks, and pots



Valentines Coloring Number Activity

 =

 =

 =

CHECK OUT MORE OF OUR WORKSHEETS!

