
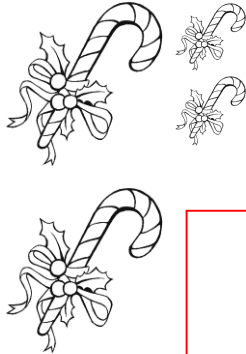




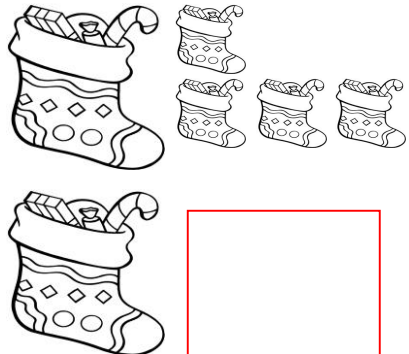
# HOW MANY?




Count the candles. There are 7 candles in total: one large one on the left and six smaller ones in a 2x3 grid on the right.




Count the candy canes. There are 4 candy canes in total: two on the left and two on the right.



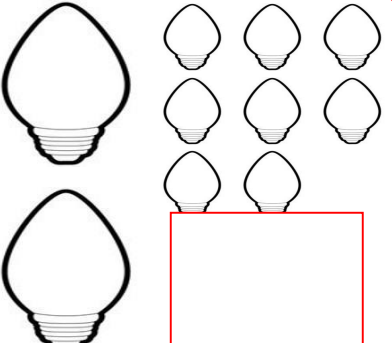
Count the socks. There are 6 socks in total: two on the left and four on the right.




Count the wreaths. There is 1 large wreath on the left and 2 smaller wreaths on the right.




Count the Christmas trees. There are 2 Christmas trees in total.




Count the light bulbs. There are 10 light bulbs in total: two on the left and eight on the right.



Count Santa Claus. There is 1 Santa Claus.



Count the gifts. There are 5 gifts in total: one large one on the left and four smaller ones on the right.



Count the stars. There are 7 stars in total: two large ones on the left and five smaller ones on the right.



|          |          |          |          |           |
|----------|----------|----------|----------|-----------|
| <b>1</b> | <b>2</b> | <b>3</b> | <b>4</b> | <b>5</b>  |
| <b>6</b> | <b>7</b> | <b>8</b> | <b>9</b> | <b>10</b> |

